




Solve each problem.

Ex) What is the ratio of stars to pentagons?



1) What is the ratio of pentagons to stars?



Answers

Ex. 15:10

1. _____

2. _____

3. _____

4. _____

5. _____

6. _____

7. _____

8. _____

9. _____

10. _____

11. _____


2) What is the ratio of hearts to squares?



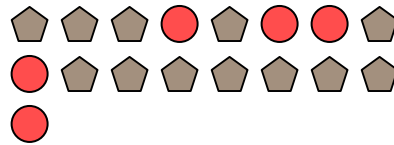
3) What is the ratio of pentagons to stars?




4) What is the ratio of stars to circles?



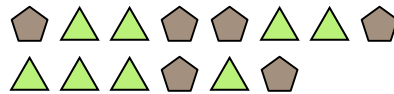
5) What is the ratio of circles to pentagons?



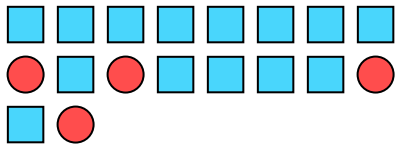
6) What is the ratio of pentagons to hearts?



7) What is the ratio of triangles to pentagons?



8) What is the ratio of squares to circles?



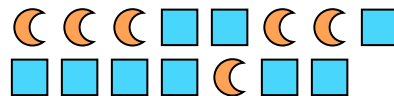
9) What is the ratio of stars to pentagons?



10) What is the ratio of moons to hearts?




11) What is the ratio of moons to squares?





Solve each problem.

Ex) What is the ratio of stars to pentagons?



1) What is the ratio of pentagons to stars?



Answers

Ex. 15:10

2) What is the ratio of hearts to squares?



3) What is the ratio of pentagons to stars?



1. 8:12

2. 10:2


3. 11:5

4. 3:10

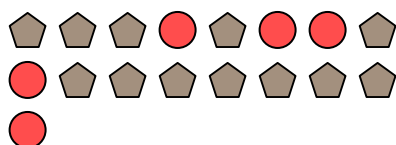
5. 5:12

6. 14:15

4) What is the ratio of stars to circles?



5) What is the ratio of circles to pentagons?




7. 8:6

8. 14:4

9. 7:5

6) What is the ratio of pentagons to hearts?



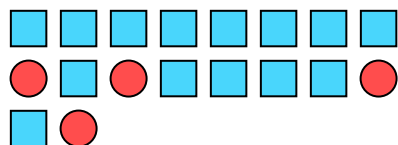
7) What is the ratio of triangles to pentagons?



10. 8:5

11. 6:9

8) What is the ratio of squares to circles?



9) What is the ratio of stars to pentagons?



10) What is the ratio of moons to hearts?



11) What is the ratio of moons to squares?

